



## MATHEMATICS CH:11- TIME

Name : \_\_\_\_\_


Date \_\_\_\_\_

Class: II Sec: \_\_\_\_

### I. Fill in the blanks :


1. There are \_\_\_\_\_ months in a year.
2. \_\_\_\_\_ month comes after February
3. \_\_\_\_\_ is the last month of the year
4. There are \_\_\_\_\_ days in the month of January.
5. A leap year has \_\_\_\_\_ days in the month of February.
6. Childrens day is celebrated in the month of \_\_\_\_\_
7. \_\_\_\_\_ is the shortest month of the year with 28 days.
8. Teachere's day falls in the month of \_\_\_\_\_
9. Write the day that comes after Tuesday \_\_\_\_\_
10. Independence day is celebrated in the month of \_\_\_\_\_

### II. Write the Time :






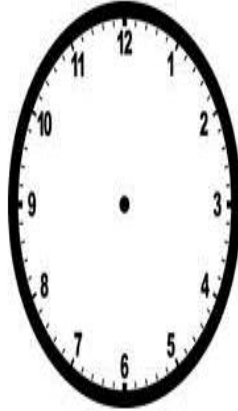
Read the time below each clock. Draw the hands on the clock to match the time given.




**2:30**




**9:00**




**4:00**




**11:30**




**8:30**




**6:00**




**7:30**



**10:30**



**1:00**



**3:00**